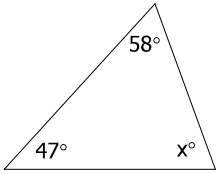


Worksheet Triangle Sum and Exterior angle Theorem

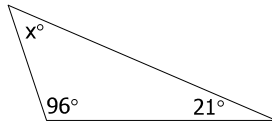
Name _____
Period _____

I. Write an Equation and use it to find the value of "x".

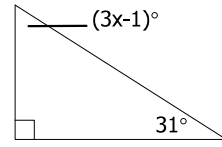
1) $x =$ _____



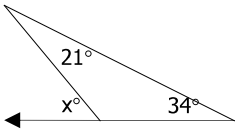
2) $x =$ _____



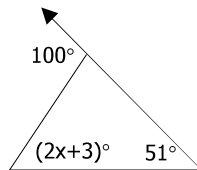
3) $x =$ _____



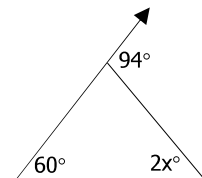
4) $x =$ _____



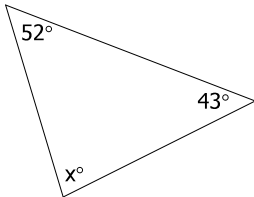
5) $x =$ _____



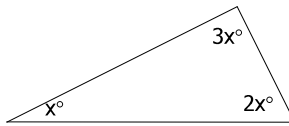
6) $x =$ _____



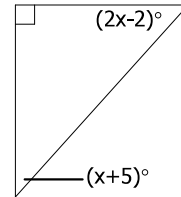
7) $x =$ _____



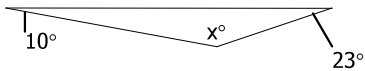
8) $x =$ _____



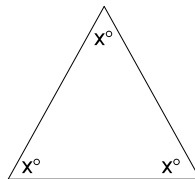
9) $x =$ _____



10) $x =$ _____



11) $x =$ _____



12) $x =$ _____

