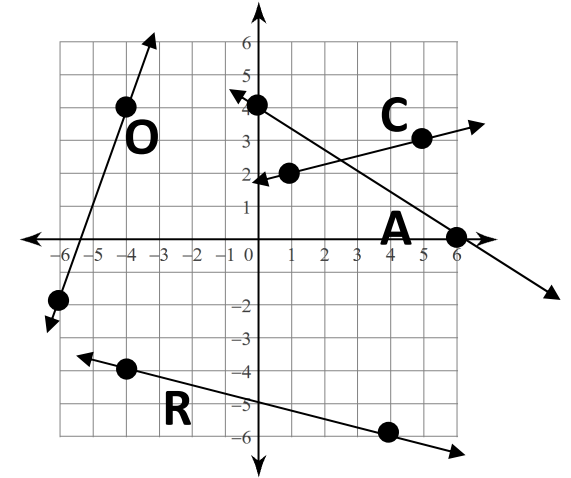
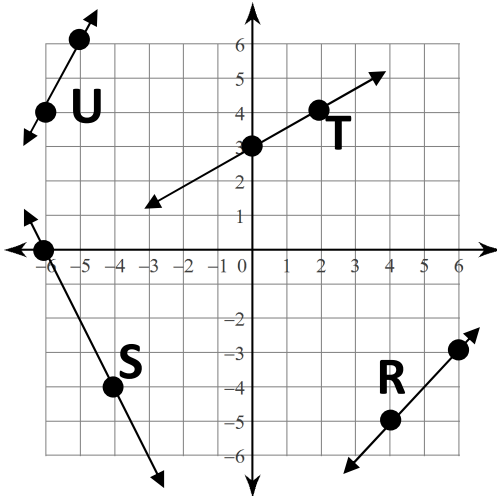
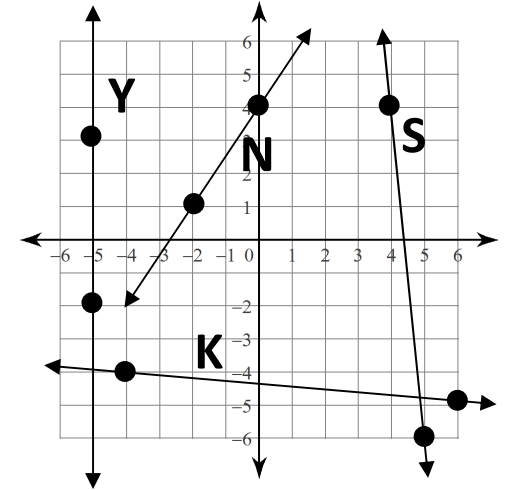
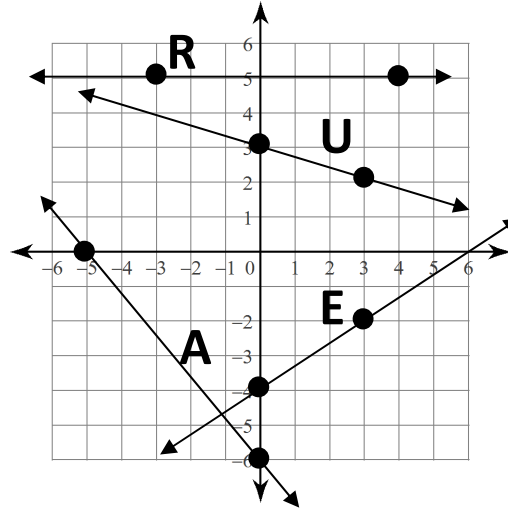
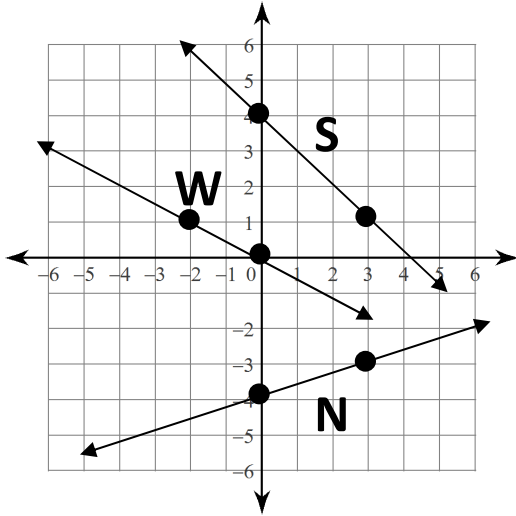


WHAT DO YOU CALL TWO DINOSAURS THAT HAVE BEEN IN AN ACCIDENT?

Find the slope. Find your answer below and write the letters above the answer.



- | | | | | | | | | | | | | | | | | | | |
|---------------|----------|---|----------------|---------------|---------------|---|-----|----------------|----------------|----------------|---|----|----------------|---|---------------|---------------|-----------------|----|
| $\frac{1}{2}$ | No slope | 0 | $-\frac{2}{3}$ | $\frac{3}{2}$ | $\frac{1}{3}$ | 3 | -10 | $-\frac{6}{5}$ | $-\frac{1}{3}$ | $-\frac{1}{4}$ | 2 | -1 | $-\frac{1}{2}$ | 1 | $\frac{2}{3}$ | $\frac{1}{4}$ | $-\frac{1}{10}$ | -2 |
|---------------|----------|---|----------------|---------------|---------------|---|-----|----------------|----------------|----------------|---|----|----------------|---|---------------|---------------|-----------------|----|